

Light and Dark I Spy and Count to 10

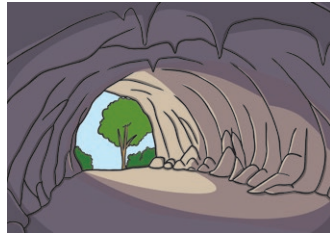


Light and Dark

I Spy and Count Checklist

Count the number of each type of light and dark item and write the numeral in the box.

dark cave



bright stars



lamps



torches




moons



shadows



suns



lightbulbs



fires



owls

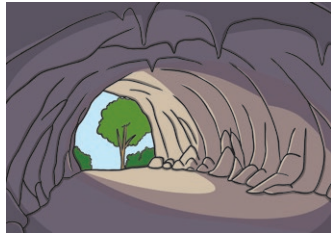


Light and Dark

I Spy and Count Answers

Count the number of each type of light and dark item and write the numeral in the box.

1 dark cave




6 bright stars



3 lamps



7 torches




3 moons



8 shadows



4 suns



9 lightbulbs



5 fires



10 owls

