

Light and Dark I Spy and Count to 20

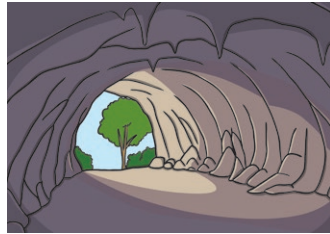


Light and Dark

I Spy and Count Checklist

Count the number of each type of light and dark item and write the numeral in the box.

dark caves




bright stars



lamps



torches




moons



shadows



suns



lightbulbs



fires



owls

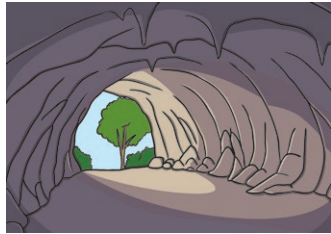


Light and Dark

I Spy and Count Answers

Count the number of each type of light and dark item and write the numeral in the box.

6 dark caves



11 bright stars



15 lamps



5 torches




13 moons




6 shadows



14 suns



5 lightbulbs



8 fires



7 owls

